



AP[®] Chemistry
2005 Free-Response Questions
Form B

The College Board: Connecting Students to College Success

The College Board is a not-for-profit membership association whose mission is to connect students to college success and opportunity. Founded in 1900, the association is composed of more than 4,700 schools, colleges, universities, and other educational organizations. Each year, the College Board serves over three and a half million students and their parents, 23,000 high schools, and 3,500 colleges through major programs and services in college admissions, guidance, assessment, financial aid, enrollment, and teaching and learning. Among its best-known programs are the SAT[®], the PSAT/NMSQT[®], and the Advanced Placement Program[®] (AP[®]). The College Board is committed to the principles of excellence and equity, and that commitment is embodied in all of its programs, services, activities, and concerns.

Copyright © 2005 by College Board. All rights reserved. College Board, AP Central, APCD, Advanced Placement Program, AP, AP Vertical Teams, Pre-AP, SAT, and the acorn logo are registered trademarks of the College Entrance Examination Board. Admitted Class Evaluation Service, CollegeEd, Connect to college success, MyRoad, SAT Professional Development, SAT Readiness Program, and Setting the Cornerstones are trademarks owned by the College Entrance Examination Board. PSAT/NMSQT is a registered trademark of the College Entrance Examination Board and National Merit Scholarship Corporation. Other products and services may be trademarks of their respective owners. Permission to use copyrighted College Board materials may be requested online at: <http://www.collegeboard.com/inquiry/cbpermit.html>.

Visit the College Board on the Web: www.collegeboard.com.

AP Central is the official online home for the AP Program and Pre-AP: apcentral.collegeboard.com.

STANDARD REDUCTION POTENTIALS IN AQUEOUS SOLUTION AT 25°C

Half-reaction	E° (V)
$F_2(g) + 2e^- \rightarrow 2F^-$	2.87
$Co^{3+} + e^- \rightarrow Co^{2+}$	1.82
$Au^{3+} + 3e^- \rightarrow Au(s)$	1.50
$Cl_2(g) + 2e^- \rightarrow 2Cl^-$	1.36
$O_2(g) + 4H^+ + 4e^- \rightarrow 2H_2O(l)$	1.23
$Br_2(l) + 2e^- \rightarrow 2Br^-$	1.07
$2Hg^{2+} + 2e^- \rightarrow Hg_2^{2+}$	0.92
$Hg^{2+} + 2e^- \rightarrow Hg(l)$	0.85
$Ag^+ + e^- \rightarrow Ag(s)$	0.80
$Hg_2^{2+} + 2e^- \rightarrow 2Hg(l)$	0.79
$Fe^{3+} + e^- \rightarrow Fe^{2+}$	0.77
$I_2(s) + 2e^- \rightarrow 2I^-$	0.53
$Cu^+ + e^- \rightarrow Cu(s)$	0.52
$Cu^{2+} + 2e^- \rightarrow Cu(s)$	0.34
$Cu^{2+} + e^- \rightarrow Cu^+$	0.15
$Sn^{4+} + 2e^- \rightarrow Sn^{2+}$	0.15
$S(s) + 2H^+ + 2e^- \rightarrow H_2S(g)$	0.14
$2H^+ + 2e^- \rightarrow H_2(g)$	0.00
$Pb^{2+} + 2e^- \rightarrow Pb(s)$	-0.13
$Sn^{2+} + 2e^- \rightarrow Sn(s)$	-0.14
$Ni^{2+} + 2e^- \rightarrow Ni(s)$	-0.25
$Co^{2+} + 2e^- \rightarrow Co(s)$	-0.28
$Cd^{2+} + 2e^- \rightarrow Cd(s)$	-0.40
$Cr^{3+} + e^- \rightarrow Cr^{2+}$	-0.41
$Fe^{2+} + 2e^- \rightarrow Fe(s)$	-0.44
$Cr^{3+} + 3e^- \rightarrow Cr(s)$	-0.74
$Zn^{2+} + 2e^- \rightarrow Zn(s)$	-0.76
$2H_2O(l) + 2e^- \rightarrow H_2(g) + 2OH^-$	-0.83
$Mn^{2+} + 2e^- \rightarrow Mn(s)$	-1.18
$Al^{3+} + 3e^- \rightarrow Al(s)$	-1.66
$Be^{2+} + 2e^- \rightarrow Be(s)$	-1.70
$Mg^{2+} + 2e^- \rightarrow Mg(s)$	-2.37
$Na^+ + e^- \rightarrow Na(s)$	-2.71
$Ca^{2+} + 2e^- \rightarrow Ca(s)$	-2.87
$Sr^{2+} + 2e^- \rightarrow Sr(s)$	-2.89
$Ba^{2+} + 2e^- \rightarrow Ba(s)$	-2.90
$Rb^+ + e^- \rightarrow Rb(s)$	-2.92
$K^+ + e^- \rightarrow K(s)$	-2.92
$Cs^+ + e^- \rightarrow Cs(s)$	-2.92
$Li^+ + e^- \rightarrow Li(s)$	-3.05

ADVANCED PLACEMENT CHEMISTRY EQUATIONS AND CONSTANTS

ATOMIC STRUCTURE

$$E = h\nu \quad c = \lambda\nu$$

$$\lambda = \frac{h}{m\nu} \quad p = m\nu$$

$$E_n = \frac{-2.178 \times 10^{-18}}{n^2} \text{ joule}$$

EQUILIBRIUM

$$K_a = \frac{[\text{H}^+][\text{A}^-]}{[\text{HA}]}$$

$$K_b = \frac{[\text{OH}^-][\text{HB}^+]}{[\text{B}]}$$

$$K_w = [\text{OH}^-][\text{H}^+] = 1.0 \times 10^{-14} \text{ @ } 25^\circ\text{C}$$

$$= K_a \times K_b$$

$$\text{pH} = -\log [\text{H}^+], \text{pOH} = -\log [\text{OH}^-]$$

$$14 = \text{pH} + \text{pOH}$$

$$\text{pH} = \text{p}K_a + \log \frac{[\text{A}^-]}{[\text{HA}]}$$

$$\text{pOH} = \text{p}K_b + \log \frac{[\text{HB}^+]}{[\text{B}]}$$

$$\text{p}K_a = -\log K_a, \text{p}K_b = -\log K_b$$

$$K_p = K_c(RT)^{\Delta n},$$

where Δn = moles product gas – moles reactant gas

THERMOCHEMISTRY/KINETICS

$$\Delta S^\circ = \sum S^\circ \text{ products} - \sum S^\circ \text{ reactants}$$

$$\Delta H^\circ = \sum \Delta H_f^\circ \text{ products} - \sum \Delta H_f^\circ \text{ reactants}$$

$$\Delta G^\circ = \sum \Delta G_f^\circ \text{ products} - \sum \Delta G_f^\circ \text{ reactants}$$

$$\Delta G^\circ = \Delta H^\circ - T\Delta S^\circ$$

$$= -RT \ln K = -2.303 RT \log K$$

$$= -n \mathcal{F} E^\circ$$

$$\Delta G = \Delta G^\circ + RT \ln Q = \Delta G^\circ + 2.303 RT \log Q$$

$$q = mc\Delta T$$

$$C_p = \frac{\Delta H}{\Delta T}$$

$$\ln[\text{A}]_t - \ln[\text{A}]_0 = -kt$$

$$\frac{1}{[\text{A}]_t} - \frac{1}{[\text{A}]_0} = kt$$

$$\ln k = \frac{-E_a}{R} \left(\frac{1}{T} \right) + \ln A$$

E = energy v = velocity

ν = frequency n = principal quantum number

λ = wavelength m = mass

p = momentum

Speed of light, $c = 3.0 \times 10^8 \text{ m s}^{-1}$

Planck's constant, $h = 6.63 \times 10^{-34} \text{ J s}$

Boltzmann's constant, $k = 1.38 \times 10^{-23} \text{ J K}^{-1}$

Avogadro's number = $6.022 \times 10^{23} \text{ mol}^{-1}$

Electron charge, $e = -1.602 \times 10^{-19} \text{ coulomb}$

1 electron volt per atom = 96.5 kJ mol^{-1}

Equilibrium Constants

K_a (weak acid)

K_b (weak base)

K_w (water)

K_p (gas pressure)

K_c (molar concentrations)

S° = standard entropy

H° = standard enthalpy

G° = standard free energy

E° = standard reduction potential

T = temperature

n = moles

m = mass

q = heat

c = specific heat capacity

C_p = molar heat capacity at constant pressure

E_a = activation energy

k = rate constant

A = frequency factor

Faraday's constant, $\mathcal{F} = 96,500 \text{ coulombs per mole of electrons}$

Gas constant, $R = 8.31 \text{ J mol}^{-1} \text{ K}^{-1}$

$= 0.0821 \text{ L atm mol}^{-1} \text{ K}^{-1}$

$= 8.31 \text{ volt coulomb mol}^{-1} \text{ K}^{-1}$

GASES, LIQUIDS, AND SOLUTIONS

$$PV = nRT$$

$$\left(P + \frac{n^2 a}{V^2} \right) (V - nb) = nRT$$

$$P_A = P_{total} \times X_A, \text{ where } X_A = \frac{\text{moles A}}{\text{total moles}}$$

$$P_{total} = P_A + P_B + P_C + \dots$$

$$n = \frac{m}{M}$$

$$K = ^\circ\text{C} + 273$$

$$\frac{P_1 V_1}{T_1} = \frac{P_2 V_2}{T_2}$$

$$D = \frac{m}{V}$$

$$u_{rms} = \sqrt{\frac{3kT}{m}} = \sqrt{\frac{3RT}{M}}$$

$$KE \text{ per molecule} = \frac{1}{2} m v^2$$

$$KE \text{ per mole} = \frac{3}{2} RT$$

$$\frac{r_1}{r_2} = \sqrt{\frac{M_2}{M_1}}$$

molarity, M = moles solute per liter solution

molality = moles solute per kilogram solvent

$$\Delta T_f = iK_f \times \text{molality}$$

$$\Delta T_b = iK_b \times \text{molality}$$

$$\pi = iMRT$$

$$A = abc$$

P = pressure

V = volume

T = temperature

n = number of moles

D = density

m = mass

v = velocity

u_{rms} = root-mean-square speed

KE = kinetic energy

r = rate of effusion

M = molar mass

π = osmotic pressure

i = van't Hoff factor

K_f = molal freezing-point depression constant

K_b = molal boiling-point elevation constant

A = absorbance

a = molar absorptivity

b = path length

c = concentration

Q = reaction quotient

I = current (amperes)

q = charge (coulombs)

t = time (seconds)

E° = standard reduction potential

K = equilibrium constant

OXIDATION-REDUCTION; ELECTROCHEMISTRY

$$Q = \frac{[C]^c [D]^d}{[A]^a [B]^b}, \text{ where } a A + b B \rightarrow c C + d D$$

$$I = \frac{q}{t}$$

$$E_{\text{cell}} = E_{\text{cell}}^\circ - \frac{RT}{n\mathcal{F}} \ln Q = E_{\text{cell}}^\circ - \frac{0.0592}{n} \log Q \text{ @ } 25^\circ\text{C}$$

$$\log K = \frac{nE^\circ}{0.0592}$$

$$\text{Gas constant, } R = 8.31 \text{ J mol}^{-1} \text{ K}^{-1}$$

$$= 0.0821 \text{ L atm mol}^{-1} \text{ K}^{-1}$$

$$= 8.31 \text{ volt coulomb mol}^{-1} \text{ K}^{-1}$$

$$\text{Boltzmann's constant, } k = 1.38 \times 10^{-23} \text{ J K}^{-1}$$

$$K_f \text{ for H}_2\text{O} = 1.86 \text{ K kg mol}^{-1}$$

$$K_b \text{ for H}_2\text{O} = 0.512 \text{ K kg mol}^{-1}$$

$$1 \text{ atm} = 760 \text{ mm Hg}$$

$$= 760 \text{ torr}$$

$$\text{STP} = 0.000^\circ\text{C and } 1.000 \text{ atm}$$

$$\text{Faraday's constant, } \mathcal{F} = 96,500 \text{ coulombs per mole of electrons}$$

2005 AP[®] CHEMISTRY FREE-RESPONSE QUESTIONS (Form B)

CHEMISTRY

Section II

(Total time—90 minutes)

Part A

Time—40 minutes

YOU MAY USE YOUR CALCULATOR FOR PART A.

CLEARLY SHOW THE METHOD USED AND THE STEPS INVOLVED IN ARRIVING AT YOUR ANSWERS. It is to your advantage to do this, since you may obtain partial credit if you do and you will receive little or no credit if you do not. Attention should be paid to significant figures.

Be sure to write all your answers to the questions on the lined pages following each question in this booklet. Do NOT write your answers on the lavender insert.

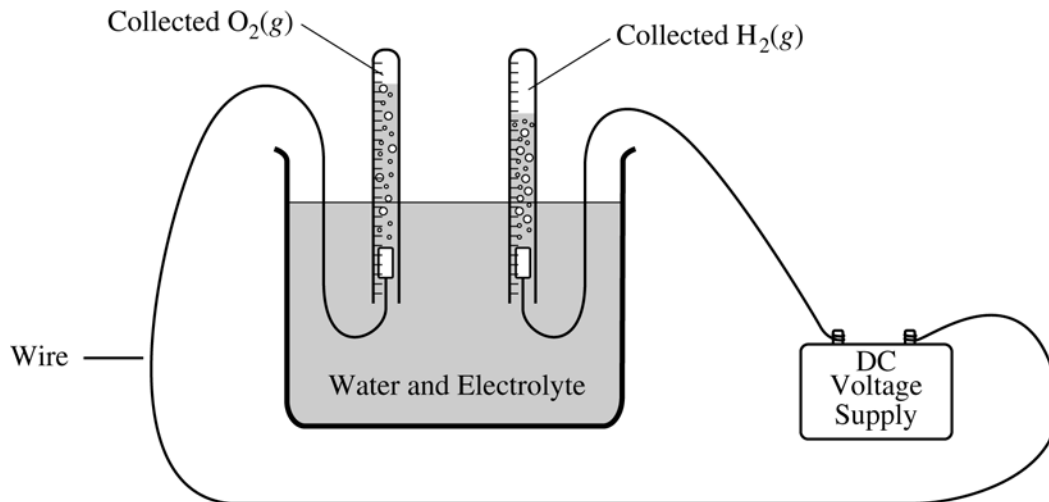
Answer Question 1 below. The Section II score weighting for this question is 20 percent.

$$K_a = \frac{[\text{H}_3\text{O}^+][\text{OCl}^-]}{[\text{HOCl}]} = 3.2 \times 10^{-8}$$

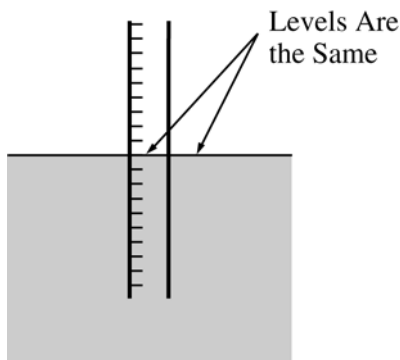
1. Hypochlorous acid, HOCl, is a weak acid in water. The K_a expression for HOCl is shown above.
 - (a) Write a chemical equation showing how HOCl behaves as an acid in water.
 - (b) Calculate the pH of a 0.175 M solution of HOCl.
 - (c) Write the net ionic equation for the reaction between the weak acid HOCl(aq) and the strong base NaOH(aq).
 - (d) In an experiment, 20.00 mL of 0.175 M HOCl(aq) is placed in a flask and titrated with 6.55 mL of 0.435 M NaOH(aq).
 - (i) Calculate the number of moles of NaOH(aq) added.
 - (ii) Calculate $[\text{H}_3\text{O}^+]$ in the flask after the NaOH(aq) has been added.
 - (iii) Calculate $[\text{OH}^-]$ in the flask after the NaOH(aq) has been added.

2005 AP[®] CHEMISTRY FREE-RESPONSE QUESTIONS (Form B)

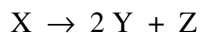
Answer EITHER Question 2 below OR Question 3 printed on pages 8 and 9. Only one of these two questions will be graded. If you start both questions, be sure to cross out the question you do not want graded. The Section II score weighting for the question you choose is 20 percent.



2. Water was electrolyzed, as shown in the diagram above, for 5.61 minutes using a constant current of 0.513 ampere. A small amount of nonreactive electrolyte was added to the container before the electrolysis began. The temperature was 298 K and the atmospheric pressure was 1.00 atm.
- Write the balanced equation for the half reaction that took place at the anode.
 - Calculate the amount of electric charge, in coulombs, that passed through the solution.
 - Why is the volume of $O_2(g)$ collected different from the volume of $H_2(g)$ collected, as shown in the diagram?
 - Calculate the number of moles of $H_2(g)$ produced during the electrolysis.
 - Calculate the volume, in liters, at 298 K and 1.00 atm of dry $H_2(g)$ produced during the electrolysis.
 - After the hydrolysis reaction was over, the vertical position of the tube containing the collected $H_2(g)$ was adjusted until the water levels inside and outside the tube were the same, as shown in the diagram below. The volume of gas in the tube was measured under these conditions of 298 K and 1.00 atm, and its volume was greater than the volume calculated in part (e). Explain.

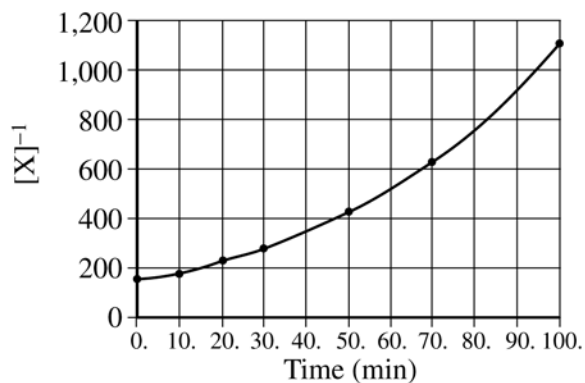
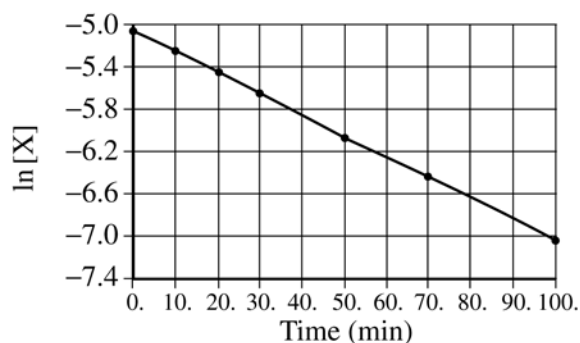
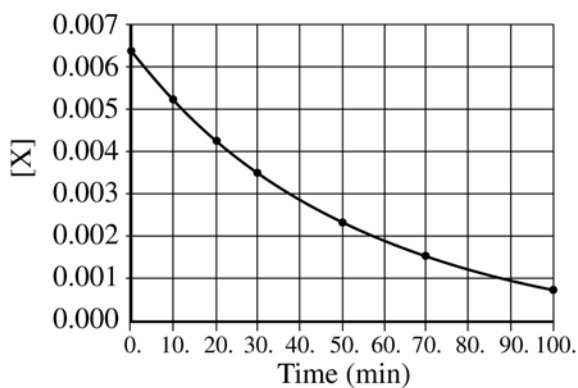


2005 AP[®] CHEMISTRY FREE-RESPONSE QUESTIONS (Form B)



3. The decomposition of gas X to produce gases Y and Z is represented by the equation above. In a certain experiment, the reaction took place in a 5.00 L flask at 428 K. Data from this experiment were used to produce the information in the table below, which is plotted in the graphs that follow.

Time (minutes)	[X] (mol L ⁻¹)	ln [X]	[X] ⁻¹ (L mol ⁻¹)
0	0.00633	-5.062	158
10.	0.00520	-5.259	192
20.	0.00427	-5.456	234
30.	0.00349	-5.658	287
50.	0.00236	-6.049	424
70.	0.00160	-6.438	625
100.	0.000900	-7.013	1,110



2005 AP[®] CHEMISTRY FREE-RESPONSE QUESTIONS (Form B)

- (a) How many moles of X were initially in the flask?
- (b) How many molecules of Y were produced in the first 20. minutes of the reaction?
- (c) What is the order of this reaction with respect to X? Justify your answer.
- (d) Write the rate law for this reaction.
- (e) Calculate the specific rate constant for this reaction. Specify units.
- (f) Calculate the concentration of X in the flask after a total of 150. minutes of reaction.

S T O P

**If you finish before time is called, you may check your work on this part only.
Do not turn to the other part of the test until you are told to do so.**

2005 AP[®] CHEMISTRY FREE-RESPONSE QUESTIONS (Form B)

CHEMISTRY

Part B

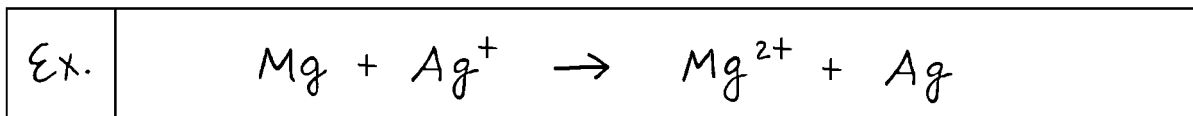
Time—50 minutes

NO CALCULATORS MAY BE USED FOR PART B.

Answer Question 4 below. The Section II score weighting for this question is 15 percent.

4. Write the formulas to show the reactants and the products for any FIVE of the laboratory situations described below. Answers to more than five choices will not be graded. In all cases, a reaction occurs. Assume that solutions are aqueous unless otherwise indicated. Represent substances in solution as ions if the substances are extensively ionized. Omit formulas for any ions or molecules that are unchanged by the reaction. You need not balance the equations.

Example: A strip of magnesium is added to a solution of silver nitrate.



- (a) A solution of potassium carbonate is added to a solution of strontium chloride.
- (b) Propene is burned in air.
- (c) Excess ammonia is added to a solution of zinc nitrate.
- (d) Ethanoic acid (acetic acid) is added to a solution of barium hydroxide.
- (e) A small piece of potassium is added to water.
- (f) Powdered iron metal is strongly heated with powdered sulfur.
- (g) A solution of sodium fluoride is added to a solution of hydrochloric acid.
- (h) A strip of lead metal is added to a solution of silver nitrate.

2005 AP[®] CHEMISTRY FREE-RESPONSE QUESTIONS (Form B)

Your responses to the rest of the questions in this part of the examination will be graded on the basis of the accuracy and relevance of the information cited. Explanations should be clear and well organized. Examples and equations may be included in your responses where appropriate. Specific answers are preferable to broad, diffuse responses.

Answer BOTH Question 5 below AND Question 6 printed on page 12. Both of these questions will be graded. The Section II score weighting for these questions is 30 percent (15 percent each).



5. In an experiment, a student synthesizes alum, $\text{KAl}(\text{SO}_4)_2 \cdot 12\text{H}_2\text{O}(s)$, by reacting aluminum metal with potassium hydroxide and sulfuric acid, as represented in the balanced equation above.

(a) In order to synthesize alum, the student must prepare a 5.0 *M* solution of sulfuric acid. Describe the procedure for preparing 50.0 mL of 5.0 *M* H_2SO_4 using any of the chemicals and equipment listed below. Indicate specific amounts and equipment where appropriate.

10.0 <i>M</i> H_2SO_4	50.0 mL volumetric flask
Distilled water	50.0 mL buret
100 mL graduated cylinder	25.0 mL pipet
100 mL beaker	50 mL beaker

(b) Calculate the minimum volume of 5.0 *M* H_2SO_4 that the student must use to react completely with 2.7 g of aluminum metal.

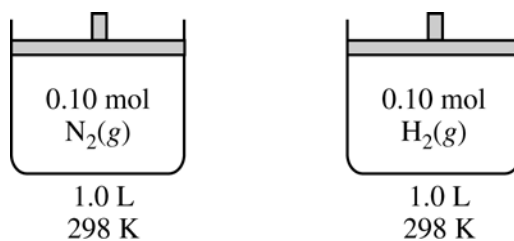
(c) As the reaction solution cools, alum crystals precipitate. The student filters the mixture and dries the crystals, then measures their mass.

(i) If the student weighs the crystals before they are completely dry, would the calculated percent yield be greater than, less than, or equal to the actual percent yield? Explain.

(ii) Cooling the reaction solution in an ice bath improves the percent yield obtained. Explain.

(d) The student heats crystals of pure alum, $\text{KAl}(\text{SO}_4)_2 \cdot 12\text{H}_2\text{O}(s)$, in an open crucible to a constant mass. The mass of the sample after heating is less than the mass before heating. Explain.

2005 AP[®] CHEMISTRY FREE-RESPONSE QUESTIONS (Form B)



6. Consider two containers of volume 1.0 L at 298 K, as shown above. One container holds 0.10 mol N₂(g) and the other holds 0.10 mol H₂(g). The average kinetic energy of the N₂(g) molecules is 6.2×10^{-21} J. Assume that the N₂(g) and the H₂(g) exhibit ideal behavior.
- Is the pressure in the container holding the H₂(g) less than, greater than, or equal to the pressure in the container holding the N₂(g)? Justify your answer.
 - What is the average kinetic energy of the H₂(g) molecules?
 - The molecules of which gas, N₂ or H₂, have the greater average speed? Justify your answer.
 - What change could be made that would decrease the average kinetic energy of the N₂(g) molecules in the container?
 - If the volume of the container holding the H₂(g) was decreased to 0.50 L at 298 K, what would be the change in each of the following variables? In each case, justify your answer.
 - The pressure within the container
 - The average speed of the H₂(g) molecules

2005 AP[®] CHEMISTRY FREE-RESPONSE QUESTIONS (Form B)

Answer EITHER Question 7 below OR Question 8 printed on page 14. Only one of these two questions will be graded. If you start both questions, be sure to cross out the question you do not want graded. The Section II score weighting for the question you choose is 15 percent.

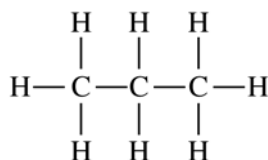
7. Answer the following questions about thermodynamics.

Substance	Combustion Reaction	Enthalpy of Combustion, ΔH_{comb}° , at 298 K (kJ mol ⁻¹)
H ₂ (g)	H ₂ (g) + $\frac{1}{2}$ O ₂ (g) → H ₂ O(l)	-290
C(s)	C(s) + O ₂ (g) → CO ₂ (g)	-390
CH ₃ OH(l)		-730

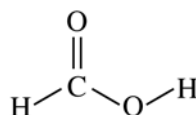
- (a) In the empty box in the table above, write a balanced chemical equation for the complete combustion of one mole of CH₃OH(l). Assume products are in their standard states at 298 K. Coefficients do not need to be whole numbers.
- (b) On the basis of your answer to part (a) and the information in the table, determine the enthalpy change for the reaction C(s) + H₂(g) + H₂O(l) → CH₃OH(l).
- (c) Write the balanced chemical equation that shows the reaction that is used to determine the enthalpy of formation for one mole of CH₃OH(l).
- (d) Predict the sign of ΔS° for the combustion of H₂(g). Explain your reasoning.
- (e) On the basis of bond energies, explain why the combustion of H₂(g) is exothermic.

2005 AP[®] CHEMISTRY FREE-RESPONSE QUESTIONS (Form B)

8. Use principles of atomic structure, bonding, and intermolecular forces to answer the following questions. Your responses must include specific information about all substances referred to in each part.
- (a) Draw a complete Lewis electron-dot structure for the CS_2 molecule. Include all valence electrons in your structure.
- (b) The carbon-to-sulfur bond length in CS_2 is 160 picometers. Is the carbon-to-selenium bond length in CSe_2 expected to be greater than, less than, or equal to this value? Justify your answer.
- (c) The bond energy of the carbon-to-sulfur bond in CS_2 is 577 kJ mol^{-1} . Is the bond energy of the carbon-to-selenium bond in CSe_2 expected to be greater than, less than, or equal to this value? Justify your answer.



Propane



Methanoic Acid

- (d) The complete structural formulas of propane, C_3H_8 , and methanoic acid, HCOOH , are shown above. In the table below, write the type(s) of intermolecular attractive force(s) that occur in each substance.

Substance	Boiling Point	Intermolecular Attractive Force(s)
Propane	229 K	
Methanoic acid	374 K	

- (e) Use principles of intermolecular attractive forces to explain why methanoic acid has a higher boiling point than propane.

END OF EXAM